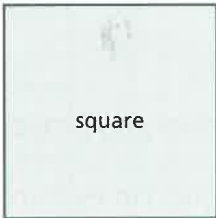




- | A   | Answer |
|---|--------|
| 1 Write in digits the number five hundred and seven.              | 507    |
| 2 $194 + 8 =$   | 202    |
| 3 $\frac{1}{8}$ of 24p =  | 3p     |
| 4 $403\text{cm} =$ <input type="text"/> m <input type="text"/> cm | 4m 3cm |
| 5 $700 - 90 =$  | 610    |
| 6 $\pounds 1.54 =$ <input type="text"/> p                         | 154p   |
| 7 $(4 \times 8) + 5 =$  | 37     |
| 8 How many days in March?   | 31     |
| 9 One 50p + three 10ps + two 2ps =                                | 84p    |
| 10 $10 \times 10 \times 10 =$                                     | 1000   |

- | B  | Answer                   |
|--|--------------------------|
| 1 What number must be added to 52 to make 70?                                  | 18                       |
| 2 To $\pounds 1.06$ add 40p.   | $\pounds 1.46$           |
| 3 From $\pounds 1.58$ take 16p.  | $\pounds 1.42$           |
| 4 Increase $8\frac{1}{2}\text{cm}$ five times.                                 | $42\frac{1}{2}\text{cm}$ |
| 5 Write < or > to make the statement true.<br>$479$ <input type="text"/> $481$ | <                        |
| 6 How many quarters in $5\frac{1}{2}$ ?  | 22                       |
| 7 Complete this sequence.<br>94, 96, 98, 100, <input type="text"/>             | 102                      |
| 8 Name the month that is three months after November.                          | February                 |
| 9 How many hundreds in 1000?   | 10                       |
| 10 Share 36p equally among four friends. How much each?                        | 9p                       |

- | C   | Answer                  |
|---|-------------------------|
| 1 Which two of these sums of money when added together make 50p?<br><div style="border: 1px solid black; display: inline-block; padding: 2px; margin: 5px;">13p 18p 27p 32p</div>   | 32p 18p                 |
| 2 How many times is the 5 in 51 greater than the 5 in 15?   | 10                      |
| 3 A petrol tank, which holds 60l, is $\frac{3}{4}$ full. How many more litres will it take?   | 15l                     |
| 4  The total length of the four sides of the square is 38cm. Find the length of one side.   | $9\frac{1}{2}\text{cm}$ |
| 5 A TV programme starts at quarter to six and ends 35min later. Write in words the time it finishes.  | twenty past six         |
| 6 What number is the arrow pointing to?<br>   | 70                      |
| 7 Which of these amounts of money is nearest to $\pounds 1.00$ ?<br><div style="border: 1px solid black; display: inline-block; padding: 2px; margin: 5px;"><math>\pounds 1.10</math> 95p <math>\pounds 0.98</math> <math>\pounds 1.05</math></div> | $\pounds 0.98$          |
| 8 Three numbers when added together total 639. One number is 9 and another is 600. Find the third.  | 30                      |
| 9  What fraction of the shape is shaded?  | $\frac{5}{6}$           |
| 10 Five biscuits cost 25p. How much is paid for two biscuits?   | 10p                     |