


SECTION 2 | Test 3

Schofield & Sims

Answer


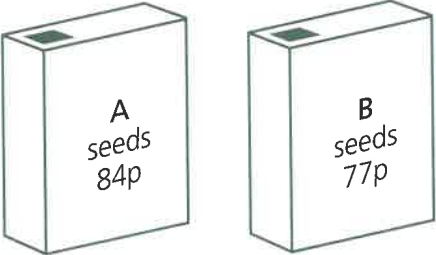
- 1 $100 - 30 =$ _____ **70**
- 2 $21 \div 3 =$ _____ **7**
- 3 $5 + 5 + 5 + 5 = \square \times 5 = \square$ $4 \times 5 = 20$
- 4 Nine 2ps + two 5ps = _____ **28p**
- 5 $\frac{1}{4}$ of 32 = _____ **8**
- 6 $10 \overline{)80}$ _____ **8p**
- 7 $23 + 8 =$ _____ **31**
- 8 $(7 \times 4) + 3 =$ _____ **31**
- 9 $\frac{3}{4} + 1\frac{1}{2} =$ _____ **$2\frac{1}{4}$**
- 10 Double $(4 \times 3) = \square \times 3$ _____ **8**

Answer

- 1 How many fours in 36? _____ **9**
- 2 Multiply 10 by 5 and add 6. _____ **56**
- 3 $1\text{m} = 100\text{cm}$. How many centimetres in $\frac{1}{2}\text{m}$? _____ **50cm**
- 4 Share 24p equally among three people. How much each? _____ **8p**
- 5 What fraction of the strip is not shaded? _____ **$\frac{9}{10}$**
- 
- 6 By how much is 19p less than three 10ps? _____ **11p**
- 7 $34 = (4 \times 10) - \square$ _____ **6**
- 8 How many minutes from five past six to a quarter to seven? _____ **40min**
- 9 How much change from 35p after spending 24p and 7p? _____ **4p**

C

Answer

- 1 By how many centimetres is 70cm shorter than 1m? _____ **30cm**
- 2 A number multiplied by itself makes 16. What is the number? _____ **4**
- 3 Divide the total of 4, 6 and 8 by 3. _____ **6**
- 4 A delivery of potatoes weighs 25kg. How many kilograms have been sold when 17kg are left? _____ **8kg**
- 5 How many tenths are there in
 a 2 whole ones **a 20**
 b $\frac{1}{2}$ a whole one? **b 5**
- 6 How many flat faces does a cylinder have? _____ **2**
- 
- 7 There are 50l of water in a bath. 32l are emptied. How many litres are left in the bath? _____ **18l**
- 8 By how much is packet A more expensive than packet B? _____ **7p**
- 
- 9 What is a quarter of the difference between 36 and 24? _____ **3**