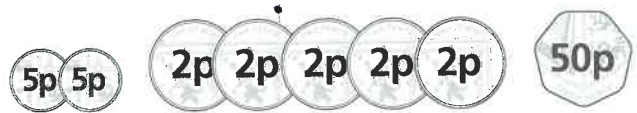


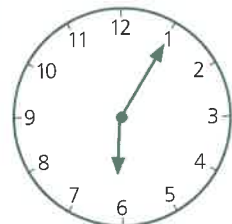
SECTION 2 | Test 1

A	Answer
1 $0 \times 10 =$	0
2 $15 \div 5 =$	3
3 $18 + 8 =$	26
4 $23 - 7 =$	16
5 A 20p, a 10p and four 2ps =	38p
6 $7p + 5p + 8p =$	20p
7 $€20 - €7 =$	€13
8 $\frac{1}{2} + \frac{1}{2} + \frac{3}{4} + \frac{1}{4} =$	2
9 $35 = \square \times 5$	7
10 $4 \times 8 =$	32

B	Answer
1 What number is 8 less than 100?	92
2 Find the total of 27p, 12p and 10p.	49p
3 How many tens in 90?	9
4 Write < or > to make the statement true. $98 \square 102$	<
5 How many $\frac{1}{2}$ cm in 15cm?	30
6 Find the difference between 9 and 27.	18
7 Add the even numbers. $\square 13 \quad 21 \quad 8 \quad 19 \quad 16$	24
8 $(3 \times 10) + \square = 36$	6
9 What number is 7 more than 45?	52
10 Write the two missing numbers in this sequence. 0, 3, 6, 9, \square , 15, \square	12 18

C	Answer
1 Find the total value of these coins.	70p
2 When 17 is taken from a number the answer is 13. What is the number?	30
3 One-quarter of the length of a window measures $8\frac{1}{2}$ cm. Find the total length of the window.	34cm
4 In a class of 32 children 19 were boys. How many were girls?	13



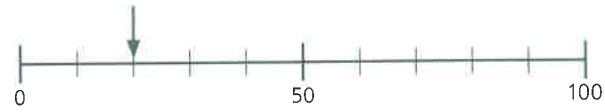
5  How many minutes from the time on the clock to half past six?

25min

6 Five friends win two prizes of 20p which they share equally. How much do they each receive?

8p

7 What number is the arrow pointing to?



20


8 Which of these numbers is nearest to 40?

$\square 34 \quad 32 \quad 42 \quad 37 \quad 45$

42

9 Which is the cheaper, A or B, and by how much?

B by 9p



10 $3 + 3 + 3 + 3 + 3 + 3 = \square \times 3$

$6 \times 3 = \square$

18