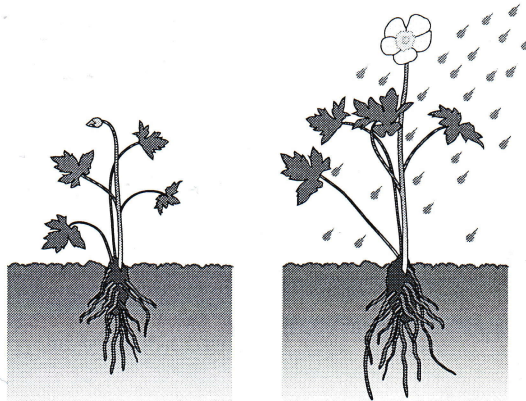


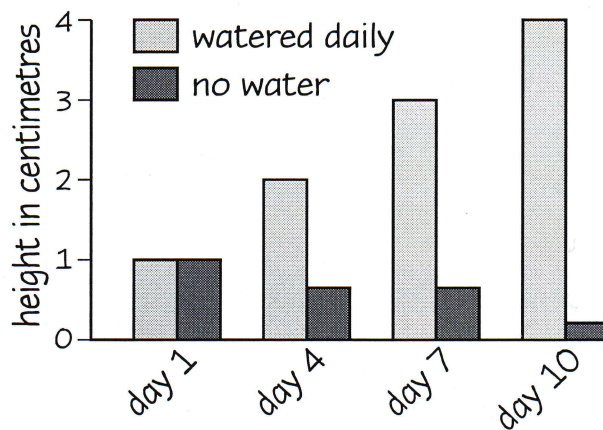
3 Growing plants experiment

Year 2 grow two plants.

- One is watered daily.
- One is not watered.
- Both are on a windowsill.



Results of the plant experiment



Use the chart above to help you complete the following:

a How tall was the watered plant on Day 7?

..... centimetres

1 mark

b This experiment shows us that plants need something to survive and grow. What is it?

.....

1 mark

c Write one more thing that plants need to survive.

.....

1 mark


Page Total

Section 2: Plants

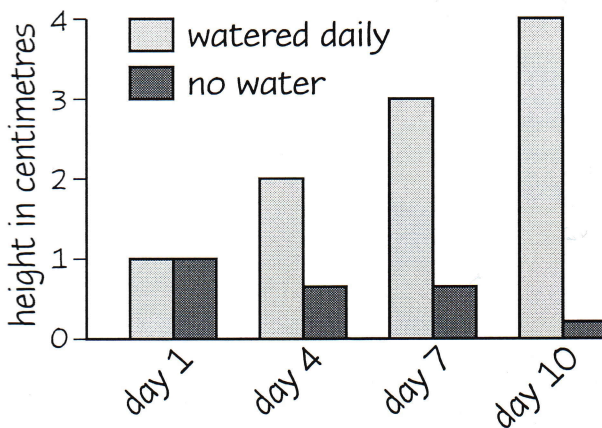
4 Growing plants experiment

Year 2 grow two plants.

- One is watered daily.
- One is not watered.
- Both are on a windowsill.



Results of the plant experiment



Use the chart above to help you complete the following:

a How tall was the watered plant on Day 7?

..... 3 centimetres

1
1 mark

b This experiment shows us that plants need something to survive and grow. What is it?

..... water

1
1 mark

c Write one more thing that plants need to survive.

..... air / nutrients / sunlight

(Accept other appropriate answers.)

1
1 mark

Page Total 3