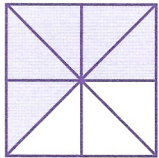
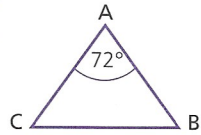
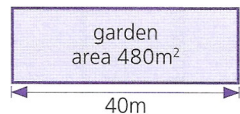


# SECTION 2 | Test 1

A	Answer
1 Write in digits thirty thousand and fifteen.	30 015
2 $2006 - 600 =$	1406
3 three 10ps and six 5ps = $\square$ 2ps	30 2ps
4 $10.04 = \square$ hundredths	1004 hundredths
5 $56 \times 20 =$	1120
6 $36\text{cm} = \square$ m	0.36m
7 $0.850\text{kg} = \square$ g	850g
8 $0.05 + 0.04 =$	0.09
9 $0.5 \times 3 =$	1.5
10 $29 + 13 = 7 \times \square$	6
11 $\pounds 0.95 =$ three 20ps + $\square$ 5ps	7 5ps
12 $\frac{9}{100}$ of $\pounds 3.00 = \square$ p	27p

B	Answer
<del>1</del> Write 639 using Roman numerals.	DCXXXIX
2  What fraction of the square is a shaded b unshaded?	a $\frac{5}{8}$ b $\frac{3}{8}$
3 Find the total of 79p, 41p and 85p.	$\pounds 2.05$
4 Write as 24-hour clock times. a 5 minutes to 9 in the morning b 10 minutes past 10 in the evening	a 08:55 b 22:10
5 By how many metres is 2km less than 2.35km?	350m
6 Round 10.47 to the nearest whole number.	10
7 What is the cost of 2m 10cm at 40p per metre?	84p
8 By how many kilograms is $1\frac{1}{2}$ kg greater than 350g?	1.15kg
9 Find the total cost of 100 balloons at 7p each.	$\pounds 7.00$
<del>10</del> What is the value in millilitres of the digit underlined in 7.3 <u>6</u> 0l?	60ml
11 By how much is the total of seven 10ps and three 5ps less than $\pounds 1$ ?	15p
12 Write in digits to the nearest 100 twenty thousand nine hundred and six.	20 900

C	Answer
1 How many packets each containing 100 cards can be made from thirteen thousand cards?	130
2 Find the change from $\pounds 1$ after paying for three oranges at 29p each.	13p
3 $\frac{1}{7}$ of the mass of a container is 600g. Find its total mass in kilograms.	4.2kg
<del>4</del>  ABC is an isosceles triangle. Find the size in degrees of the a angle at B b angle at C.	a 54° b 54°
5 Three bottles contain 1.3l, 0.9l and 0.5l. Find in millilitres the mean average of these quantities.	900ml
6 A bus journey takes 47min. If a bus leaves at 09:50, at what time does it arrive?	10:37
7  Find the width of the garden.	12m
8 The population of a town is 59609. Write this number to the nearest 1000.	60 000
9 The bus fare for a child is half that of an adult. Find the total fares for two adults and four children if a full fare is 54p.	$\pounds 2.16$
<del>10</del> On a map each 1mm represents 50m in real life. What length does a line measuring 8mm on the map represent?	400m
11 What number is 17 less than 7?	-10
12 Which shape has the greater perimeter and by how many centimetres? square by <u>2</u> cm	
