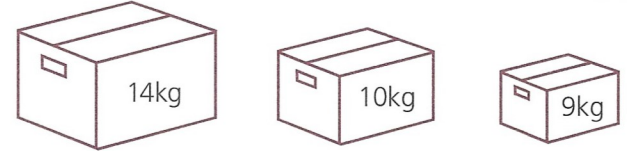
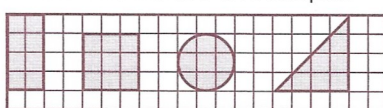

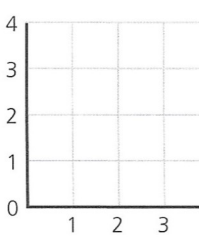


A	Answer
1 $8 + 7000 + \blacksquare = 7808$	800
2 $£6.00 - £1.95 = £\blacksquare$	£4.05
3 $46 \times 6 =$	276
4 $7 \overline{) 749}$	107
5 $85p + \blacksquare p = £1.15$	30p
6 $5\text{kg } 60\text{g} = \blacksquare\text{g}$	5060g
7 $7\text{cm} - 1.5\text{cm} = \blacksquare\text{mm}$	55mm
8 $£9.00 \div 100 = \blacksquare\text{p}$	9p
9 $2.75\text{m} = \blacksquare\text{m } \blacksquare\text{cm}$	2m 75cm
10 $\frac{4}{5}$ of $35\text{kg} =$	28kg
11 $200\text{min} = \blacksquare\text{h } \blacksquare\text{min}$	3h 20min
12 $\frac{1}{4}\text{kg} + 130\text{g} + \blacksquare\text{g} = \frac{1}{2}\text{kg}$	120g

B	Answer
1 Divide the sum of 53 and 65 by 2.	59
2 The change from £2.00 was 43p. How much had been spent?	£1.57
3 Find the product of 8 and 8.	64
4 10 paintbrushes cost £1.20. Find the cost of one paintbrush.	12p
5 Write the next two numbers of this sequence. 0.2, 0.4, 0.6, 0.8, $\blacksquare$ , $\blacksquare$	1.0 1.2
6 From $360^\circ$ subtract the sum of two right angles.	$180^\circ$
7 How many kilometres and metres are equal to 1560m?	1km 560m
8 Write $9\frac{3}{8}$ to the nearest whole number.	9
9 Write these times using the 12-hour clock format. Use a.m. or p.m. a 15:45 b 00:15	a 3:45 p.m. b 12:15 a.m.
10 How many whole ones are equal to 36 quarters?	9
11 How many tens have the same value as 5010?	501
12 The sum of two numbers is 17. The difference between them is 1. What are the two numbers?	8 9

C	Answer
1 Find the change from £5 after spending £1.33 and £2.57.	£1.10
2 The temperature dropped from $0^\circ\text{C}$ by five degrees and then rose two degrees. What is the temperature now?	$-3^\circ\text{C}$
3 Add the masses and divide by 3.	11kg
	
4 Grapes cost £3.60 per kilogram. What is the cost of 2kg 500g?	£9.00
5 By counting the small squares find the two shapes which are equal in area. Name the two shapes.	rectangle triangle
	
6 Isaac had 150 stickers. He put 15 stickers on each of eight pages in his album. How many stickers had he left?	30
7  This clock is 15 minutes fast. Write the correct time in digits using a.m. or p.m.	9.53 a.m.
<p style="text-align: center;">morning</p>	
8 A pack of four pairs of socks can be bought for £5.12. Find the cost of one pair.	£1.28
9 At a football match there were 12 498 spectators. Write the number of spectators a to the nearest ten b to the nearest hundred.	a 12 500 b 12 500
10  A square has vertices at (3, 0), (4, 2), (2, 3) and (x, y). What are the values of x and y?	( 1, 1)
11 Share 80p between Amy and Katy so that Amy has 20p more than Katy.	Amy 50p Katy 30p
12 There were 2.5l of milk for four children. 100ml were spilt and the remainder was divided equally. What was one share?	600ml