




# Written Multiplication

1 Calculate:


$$\begin{array}{r} 158 \\ \times 23 \\ \hline \end{array}$$


$$\begin{array}{r} 587 \\ \times 32 \\ \hline \end{array}$$


$$1349 \times 12$$


2 A television costs £369.

What is the total cost of 24 televisions?




£

3 136 children are having a party.

Each child pays 75p towards food and drink.

How much money is this in total? Show your working.




£

4 A box contains 2137 packets of screws. Each pack has 24 screws in it.

How many screws does the box contain altogether?

Show your working clearly.



screws

"I can multiply a four-digit number by a two-digit number."

